


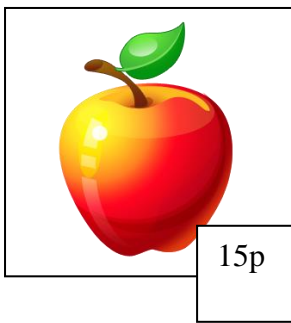


19.6.20 LO – To solve multiplication problems



1. Annie bought 3 apples.
2. Billy bought 5 oranges.
3. Charlotte bought 2 bananas.
4. Daniel bought 4 pears.

For each question write the : -  
Number sentence:

How much they spend in total

What coins they could use

If they used a £2 coin, what their change would be